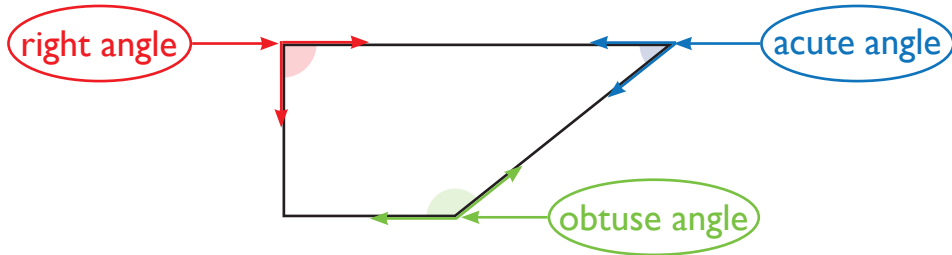


What's Your Angle?



Write the name of each angle.

1



right angle

2



acute angle

3




right angle

4




obtuse angle

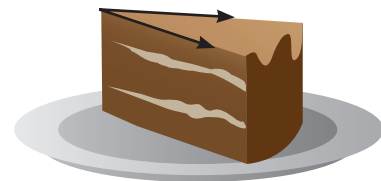
Write the name of the marked angle



obtuse



right



acute

Count the different kinds of angles in the drawing.
Write how many of each angle you find.

4

right angle

10

acute angle

11

obtuse angle

