

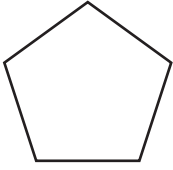
Name: \_\_\_\_\_

Date: \_\_\_\_\_

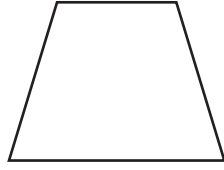
## Answers

# All Kinds of Polygons


Decide if each figure is a polygon. If it is, write the name on the line.



Pentagon



Trapezoid



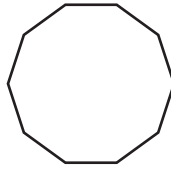
Star



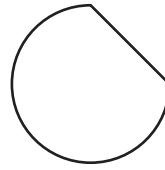
Not a Polygon



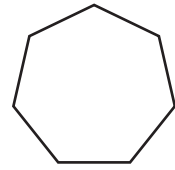
Not a Polygon



Decagon





Not a Polygon



Heptagon

Draw two congruent polygons below.



Identify the points, lines, line segments, and rays.



Ray



Line



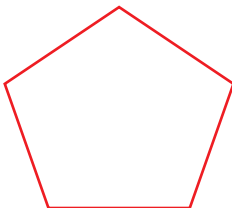
Point



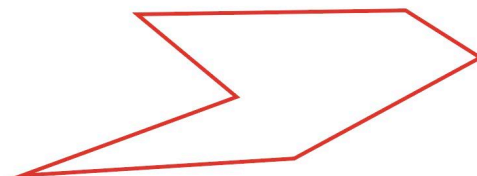
Line Segment

Draw each of the polygons below.

a. Regular pentagon



b. Irregular hexagon



c. Regular octagon

