

Name: _____

Date: _____

ANSWERS

All About Trapezoids

How many sides does a trapezoid have?

4

How many sets of parallel sides does a trapezoid have?

1

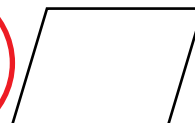
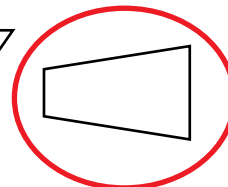
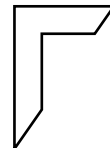
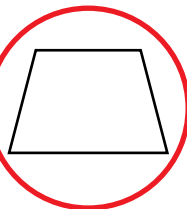
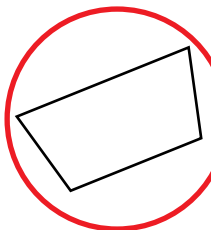
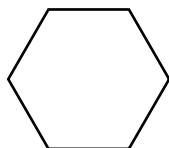
Where in the real world do you see trapezoids?

Roofs, popcorn carton, tables


How would you describe a trapezoid?

It is a 2-D shape with 4 sides, 2 of which are parallel to each other.

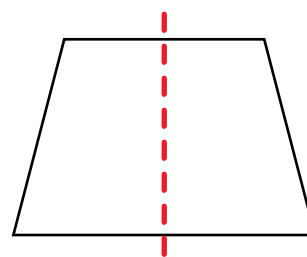
Circle the shapes that are trapezoids.



Draw a trapezoid.



Draw the line of symmetry on this trapezoid.



Draw a picture using as many trapezoids as you can.

Answers will vary.