



Answers

Bath Time Math

How many of each picture do you see? Add them up and write the number in the box!

4

1



+




=


5

3

4



+




=


7

4

2



+



=

6