

# Addition and Subtraction


**Directions:** Can you solve these produce word problems? Try drawing pictures to help figure out what the answer is!

If you needed **3** apples for a pie and **4** apples for juice, how many apples do you need to buy?




$$3 + 4 = 7$$

You have **2** bananas. You need **1** more. How many bananas do you need altogether?




$$2 + 1 = 3$$

If you were carrying **10** strawberries, and **3** fell on the ground, how many would you have left in your bag?



$$10 - 3 = 7$$

If you have **6** oranges and you decide to put **5** back, how many are you left with?



$$6 - 5 = 1$$