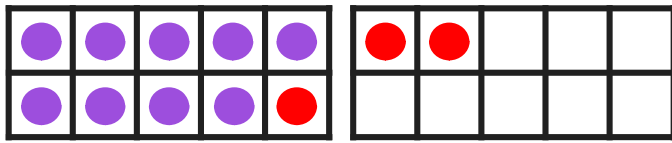


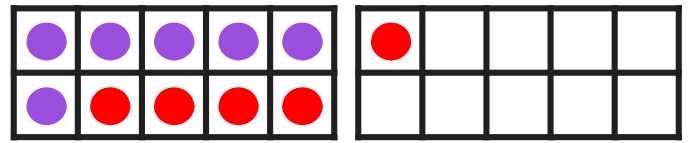
Adding Within 20

Using Ten Frames

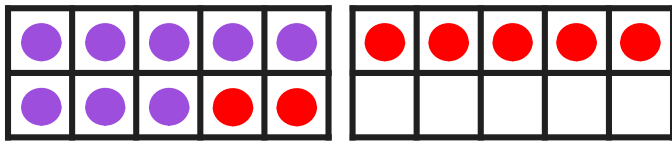
Directions: Use the ten frames to add. Draw more to make the number sentence true. Then write the answer.



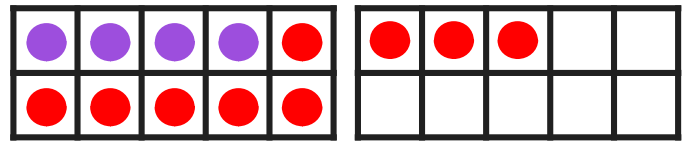
$$9 + 3 = \underline{12}$$



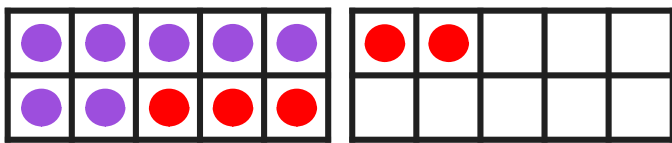
$$6 + 5 = \underline{11}$$



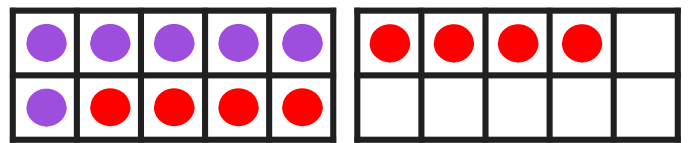
$$8 + 7 = \underline{15}$$



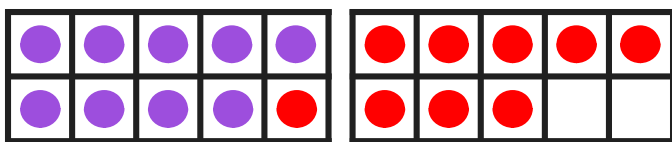
$$4 + 9 = \underline{13}$$



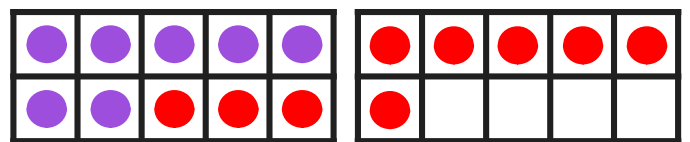
$$7 + 5 = \underline{12}$$



$$6 + 8 = \underline{14}$$



$$9 + 9 = \underline{18}$$



$$7 + 9 = \underline{16}$$