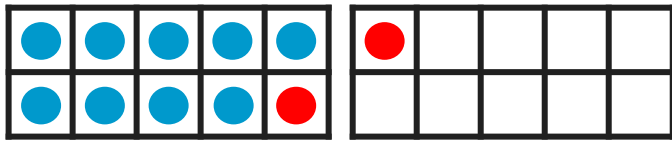
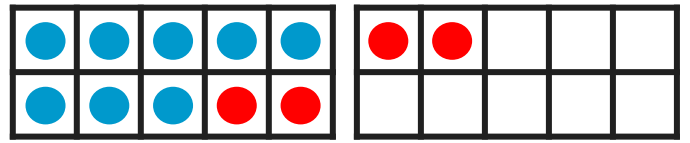


Adding Within 20 Using Ten Frames: Missing Numbers

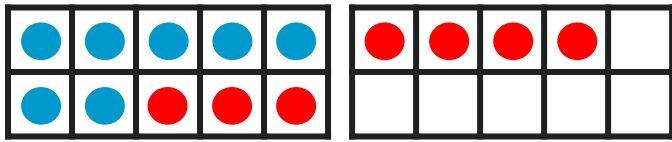
Directions: Use the ten frames to find the missing number. Draw more to make the number sentence true. Then write the answer.



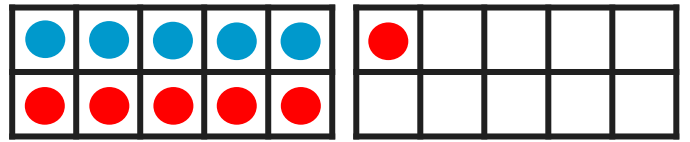
$$9 + \underline{2} = 11$$



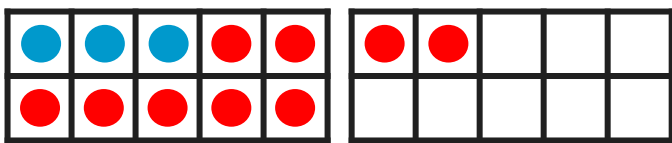
$$8 + \underline{4} = 12$$




$$7 + \underline{7} = 14$$




$$5 + \underline{6} = 11$$




$$3 + \underline{9} = 12$$



$$8 + \underline{8} = 16$$



$$9 + \underline{7} = 16$$



$$7 + \underline{8} = 15$$