


Name: \_\_\_\_\_


Date: \_\_\_\_\_

# Adding Vegetables


Solve the addition equations to find out how many vegetables are in the garden!




$$1. 6 + 8 = \underline{14}$$




$$2. 1 + 11 = \underline{12}$$




$$3. 7 + 4 = \underline{11}$$



$$4. 5 + 10 = \underline{15}$$



$$5. 7 + 2 = \underline{9}$$



$$6. 8 + 2 = \underline{10}$$