



Name \_\_\_\_\_ Date \_\_\_\_\_



Answer Key



# Adding Balloons Up to 10







Add. Use the pictures to help you.




$$4 + 2 = \underline{\quad 6 \quad}$$




$$6 + 1 = \underline{\quad 7 \quad}$$




$$5 + 2 = \underline{\quad 7 \quad}$$


$$3 + 3 = \underline{\quad 6 \quad}$$


$$4 + 1 = \underline{\quad 5 \quad}$$


$$5 + 4 = \underline{\quad 9 \quad}$$


$$6 + 3 = \underline{\quad 9 \quad}$$


$$7 + 3 = \underline{\quad 10 \quad}$$