


Name _____

Date _____

Answer Key

Adding Two-Digit Numbers on an Open Number Line #3

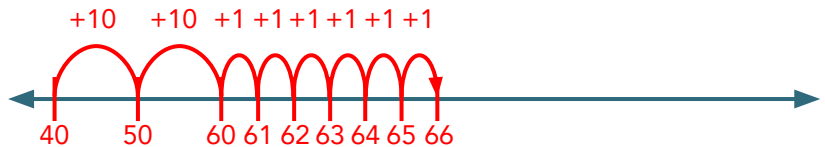


Find each sum using the number line.

$$57 + 20 = \boxed{77}$$



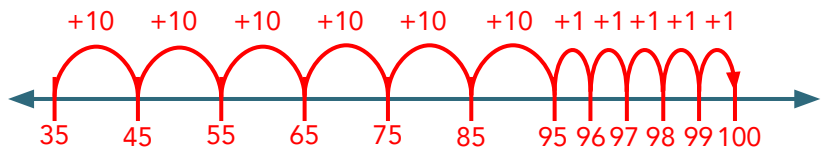
$$40 + 26 = \boxed{66}$$



$$76 + 13 = \boxed{89}$$



$$35 + 65 = \boxed{100}$$



$$23 + 59 = \boxed{82}$$

