


Name _____

Date _____

Answer Key

Adding Two-Digit Numbers on an Open Number Line #2



Find each sum using the number line. *Sample Answers*

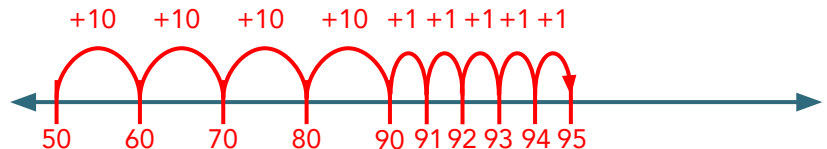
$$16 + 30 = \boxed{46}$$



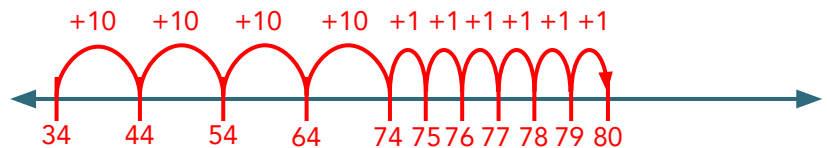
$$72 + 11 = \boxed{83}$$



$$50 + 45 = \boxed{95}$$



$$34 + 46 = \boxed{80}$$



$$57 + 37 = \boxed{94}$$

