


Name _____

Date _____

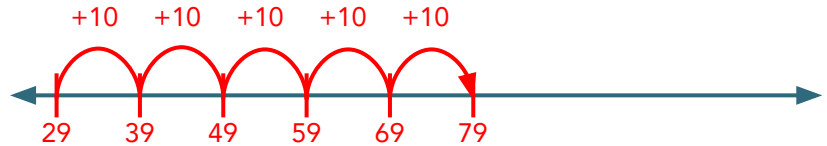
Answer Key

Adding Two-Digit Numbers on an Open Number Line #1

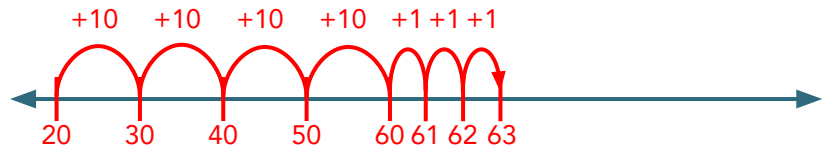


Find each sum using the number line. *Sample Answers*

$$29 + 50 = \boxed{79}$$



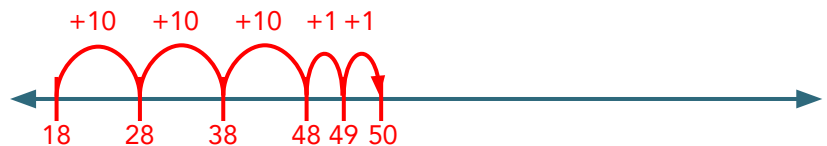
$$20 + 43 = \boxed{63}$$



$$74 + 15 = \boxed{89}$$



$$18 + 32 = \boxed{50}$$



$$25 + 66 = \boxed{91}$$

