

Name _____

Date _____

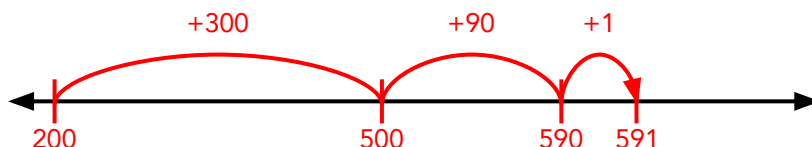
Answer Key

Adding Three-Digit Numbers on an Open Number Line #3

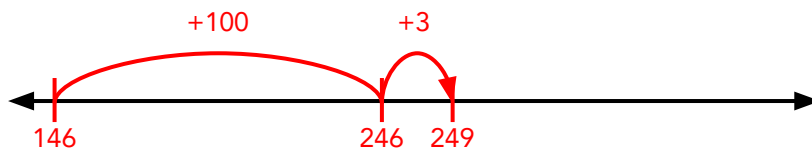


Find each sum using the number line.

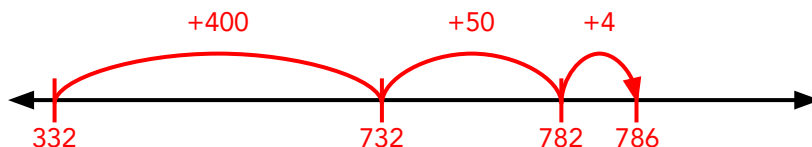
$200 + 391 = \boxed{591}$



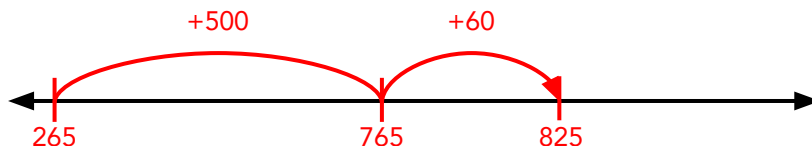
$146 + 103 = \boxed{249}$



$332 + 454 = \boxed{786}$



$265 + 560 = \boxed{825}$



$707 + 249 = \boxed{956}$

