

Name _____

Date _____

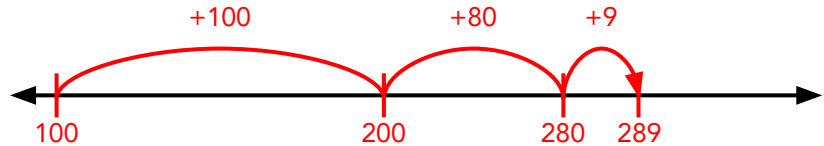
Answer Key

Adding Three-Digit Numbers on an Open Number Line #2

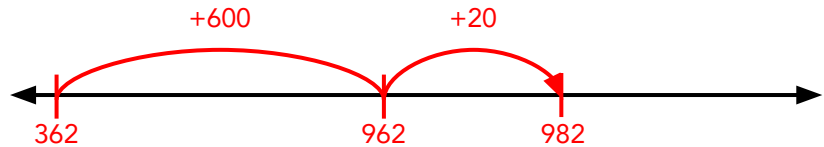


Find each sum using the number line. Sample Answers

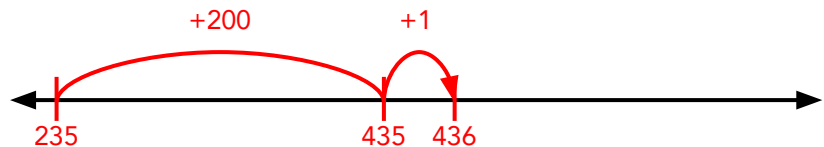
$$100 + 189 = \boxed{289}$$



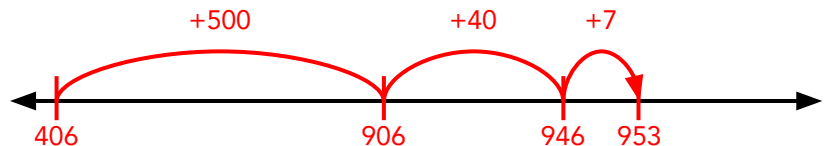
$$362 + 620 = \boxed{982}$$



$$235 + 201 = \boxed{436}$$



$$406 + 547 = \boxed{953}$$



$$548 + 392 = \boxed{940}$$

