

Name _____

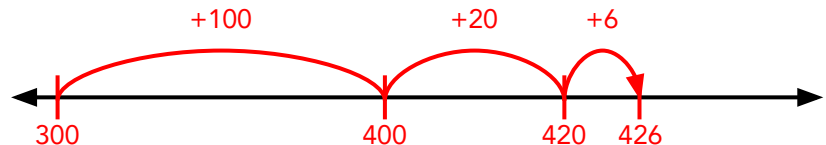
Date _____

Answer Key

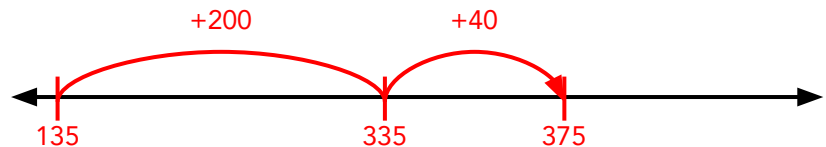
Adding Three-Digit Numbers on an Open Number Line #1

Find each sum using the number line. **Sample Answers**

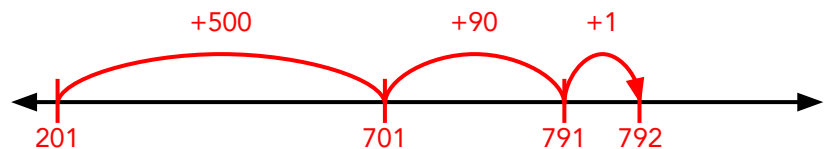
$$300 + 126 = \boxed{426}$$



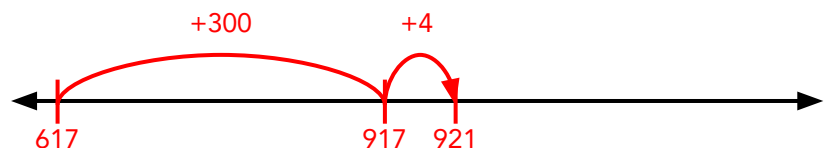
$$135 + 240 = \boxed{375}$$



$$201 + 591 = \boxed{792}$$



$$617 + 304 = \boxed{921}$$



$$239 + 468 = \boxed{707}$$

