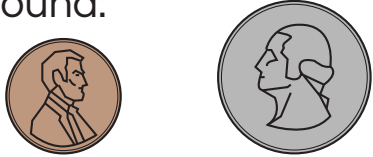
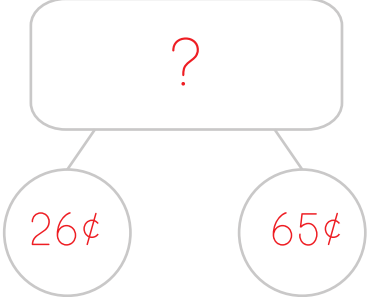

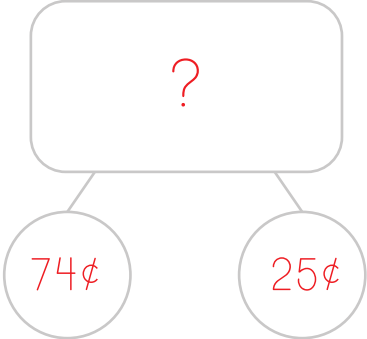

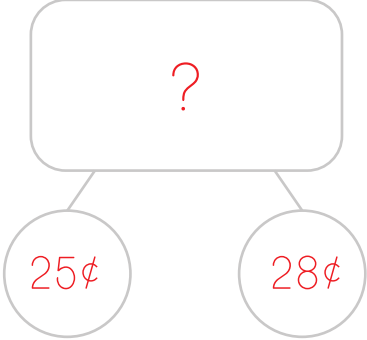


Name: _____

Date: _____

Adding Money Word Problems

Read the word problems, then fill out the number bonds to answer the question. Show your work.


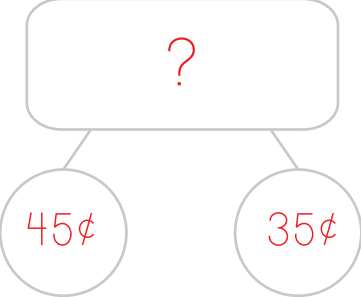

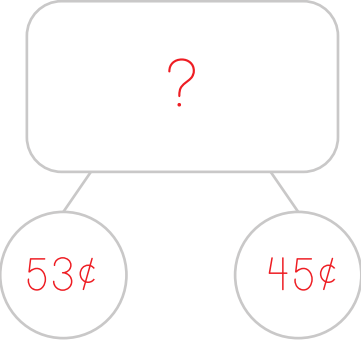

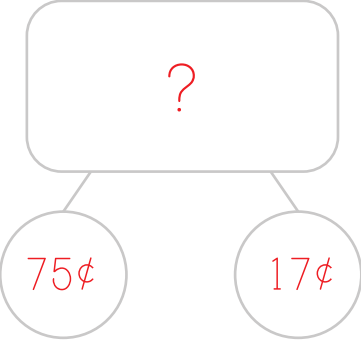
Example: Julia had 65¢. She found the following coins on the ground:  How much does she have now?	Number Bond 	Work space $\begin{array}{r} 65 \\ +26 \\ \hline 91 \end{array}$	Answer 91¢
1. Tristan had 74¢. Juniper gave him a quarter.  How much does he have now?		$\begin{array}{r} 74 \\ +25 \\ \hline 99 \end{array}$	99¢
2. Jon had 28¢. He walked the neighbor's dog and earned 25¢.  How much does he have now?		$\begin{array}{r} 25 \\ +28 \\ \hline 53 \end{array}$	53¢

Name: _____

Date: _____

Adding Money Word Problems (continued)

Read the word problems, then fill out the number bonds to answer the question. Show your work.

3. Lula sold one cupcake for 45¢ and one cookie for the coins below.	Number Bond	Work space	Answer
 <p>How much did she make in all?</p>		$\begin{array}{r} 45 \\ +35 \\ \hline 80 \end{array}$	80¢
<p>4. Jayden spent the coins below at a garage sale.</p>  <p>How much did he spend in all?</p>		$\begin{array}{r} 53 \\ +45 \\ \hline 98 \end{array}$	98¢
<p>5. Sophia was given her allowance of 75¢ then found these coins under the couch.</p>  <p>How much does she have in all?</p>		$\begin{array}{r} 75 \\ +17 \\ \hline 92 \end{array}$	92¢