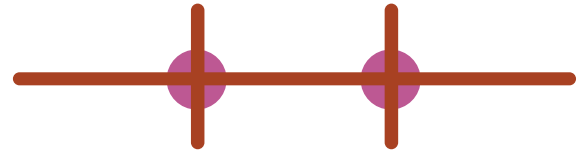


Answer Key

Name: _____

Date: _____

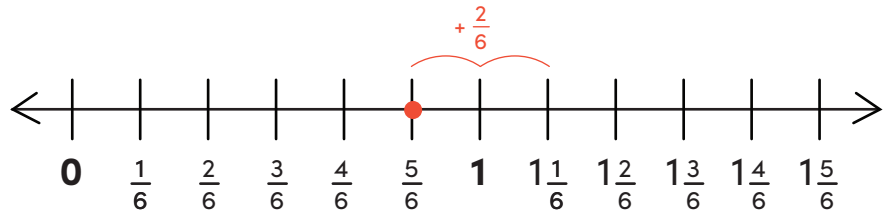
Add Fractions on a Number Line #1



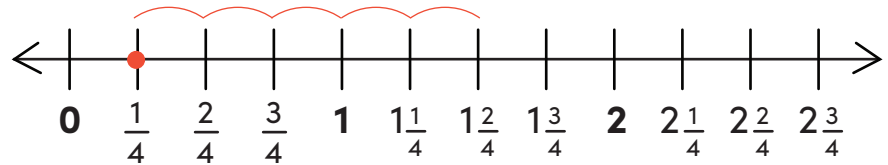
Directions: Use each number line to add the fractions.

Remember to fill in the missing numbers on the blank number lines!

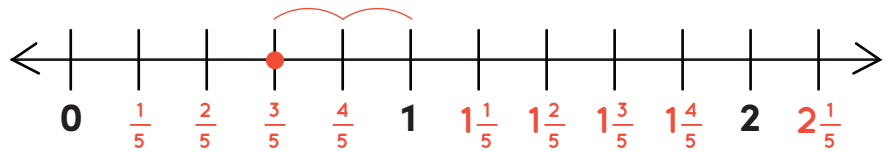
Example: $\frac{5}{6} + \frac{2}{6} = 1\frac{1}{6}$



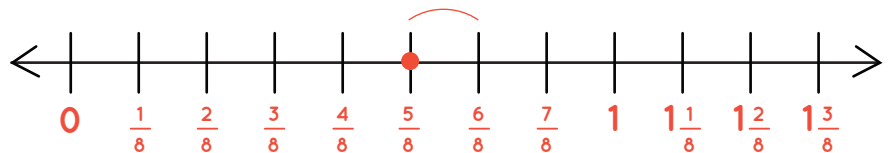
a. $\frac{1}{4} + \frac{5}{4} =$ $1\frac{2}{4}$



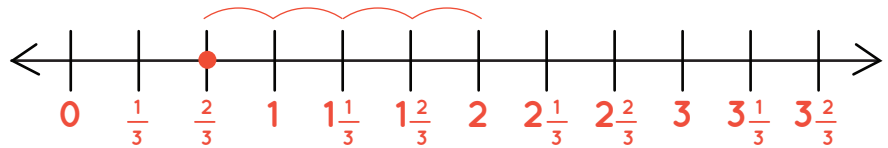
b. $\frac{3}{5} + \frac{2}{5} =$ 1



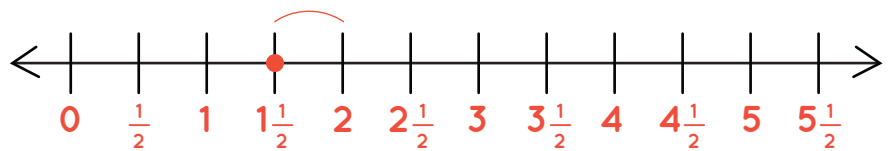
c. $\frac{5}{8} + \frac{1}{8} =$ $\frac{6}{8}$



d. $\frac{2}{3} + \frac{4}{3} =$ 2



e. $1\frac{1}{2} + \frac{1}{2} =$ 2



Challenge!

f. $\frac{5}{6} + \frac{2}{3} =$ $\frac{5}{6} + \frac{4}{6} = 1\frac{3}{6}$

