

Tasty

Addition

Practice

1st
GRADE


$$\begin{array}{r} 1 \\ +1 \\ \hline \end{array}$$


$$\begin{array}{r} 2 \\ +5 \\ \hline \end{array}$$


$$6+1=$$


$$\begin{array}{r} 7 \\ +0 \\ \hline \end{array}$$

Table of Contents

Tasty Addition Practice

Bubble Gum Math!
Pineapple Addition!
Watermelon Math
Cupcake Math
Simple Addition: Watermelons
Mushroom Math
Simple Addition: Strawberries
Simple Addition: Pineapples
Apple Tree Math
Fruity Math Blast!
Simple Addition: Oranges
Color By Sum: Fabulous Fruits
Gummy Math!

Certificate of Completion

Grade 1

Bubble Gum Math!

Addition is as easy as blowing bubbles! Add the numbers.

$$\begin{array}{r}
 1. \quad 3 \\
 + 1 \\
 \hline
 \end{array}$$

$$\begin{array}{r}
 2. \quad 3 \\
 + 3 \\
 \hline
 \end{array}$$

$$\begin{array}{r}
 3. \quad 7 \\
 + 2 \\
 \hline
 \end{array}$$

$$\begin{array}{r}
 4. \quad 1 \\
 + 6 \\
 \hline
 \end{array}$$

$$\begin{array}{r}
 5. \quad 8 \\
 + 1 \\
 \hline
 \end{array}$$

$$\begin{array}{r}
 6. \quad 5 \\
 + 2 \\
 \hline
 \end{array}$$

$$\begin{array}{r}
 7. \quad 3 \\
 + 6 \\
 \hline
 \end{array}$$

$$\begin{array}{r}
 8. \quad 1 \\
 + 2 \\
 \hline
 \end{array}$$

$$\begin{array}{r}
 9. \quad 1 \\
 + 4 \\
 \hline
 \end{array}$$

$$\begin{array}{r}
 10. \quad 4 \\
 + 3 \\
 \hline
 \end{array}$$

$$\begin{array}{r}
 11. \quad 4 \\
 + 1 \\
 \hline
 \end{array}$$


$$\begin{array}{r}
 12. \quad 2 \\
 + 4 \\
 \hline
 \end{array}$$



Grade 1

Pineapple Addition!

Pineapples are sweet and tangy! Add the numbers.
Use the pineapples to help you count.



1.

$$\begin{array}{r} 2 \\ + 7 \\ \hline \end{array}$$

2.

$$\begin{array}{r} 6 \\ + 2 \\ \hline \end{array}$$

3.

$$\begin{array}{r} 5 \\ + 1 \\ \hline \end{array}$$

4.

$$\begin{array}{r} 4 \\ + 4 \\ \hline \end{array}$$

5.

$$\begin{array}{r} 4 \\ + 3 \\ \hline \end{array}$$

6.

$$\begin{array}{r} 1 \\ + 7 \\ \hline \end{array}$$

7.

$$\begin{array}{r} 7 \\ + 2 \\ \hline \end{array}$$

8.

$$\begin{array}{r} 1 \\ + 2 \\ \hline \end{array}$$

9.

$$\begin{array}{r} 1 \\ + 1 \\ \hline \end{array}$$

10.

$$\begin{array}{r} 2 \\ + 2 \\ \hline \end{array}$$

11.

$$\begin{array}{r} 2 \\ + 3 \\ \hline \end{array}$$

12.

$$\begin{array}{r} 2 \\ + 4 \\ \hline \end{array}$$


Grade 1

Watermelon Math


Watermelon tastes great on a hot summer day! Add the numbers.
Use the watermelons to help you count.




1.

$$\begin{array}{r} 1 \\ + 5 \\ \hline \end{array}$$



2.

$$\begin{array}{r} 3 \\ + 1 \\ \hline \end{array}$$


3.

$$\begin{array}{r} 3 \\ + 4 \\ \hline \end{array}$$



4.

$$\begin{array}{r} 4 \\ + 4 \\ \hline \end{array}$$



5.

$$\begin{array}{r} 2 \\ + 4 \\ \hline \end{array}$$



6.

$$\begin{array}{r} 1 \\ + 3 \\ \hline \end{array}$$



7.

$$\begin{array}{r} 2 \\ + 7 \\ \hline \end{array}$$


8.

$$\begin{array}{r} 1 \\ + 8 \\ \hline \end{array}$$



9.

$$\begin{array}{r} 4 \\ + 3 \\ \hline \end{array}$$



10.

$$\begin{array}{r} 1 \\ + 7 \\ \hline \end{array}$$



11.

$$\begin{array}{r} 5 \\ + 2 \\ \hline \end{array}$$


12.


$$\begin{array}{r} 3 \\ + 2 \\ \hline \end{array}$$


Cupcake Math



Instructions:

Complete each math problem and color the page!




SIMPLE ADDITION




Single Digit Addition

Add the numbers inside the watermelon and circle the ones that add up to the number on the top.


15




14




11




17




13



12



Mushroom Math




Instructions:

Complete each math problem and color the page!

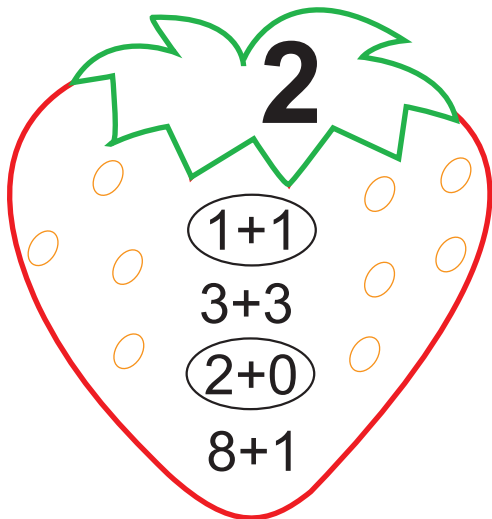


SIMPLE ADDITION




Single Digit Addition

Add the numbers inside the strawberry and circle the ones that add up to the number on the leaf.



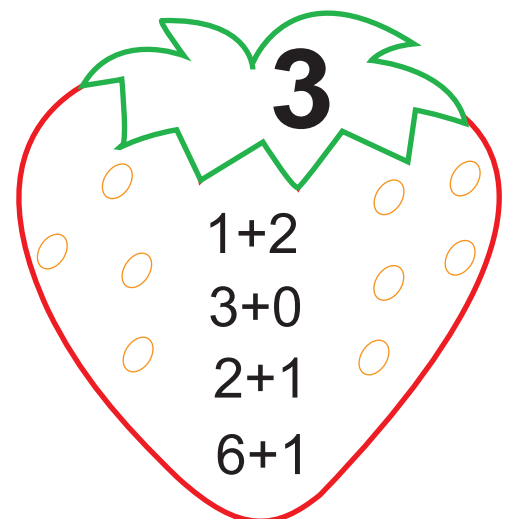
2

$1+1$
 $3+3$
 $2+0$
 $8+1$



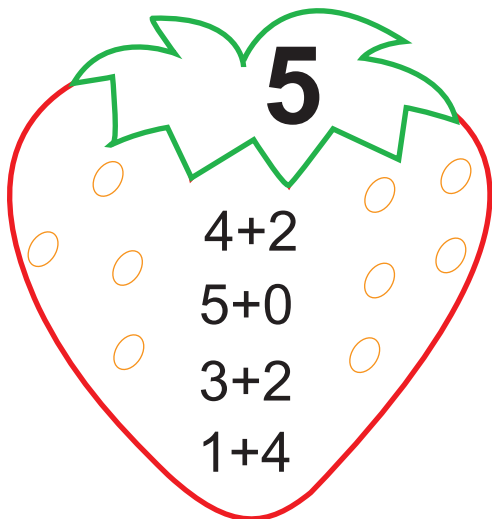
10

$9+1$
 $6+4$
 $8+6$
 $7+1$



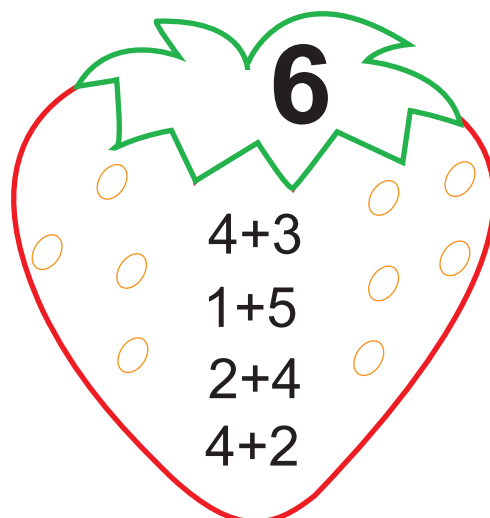
3

$1+2$
 $3+0$
 $2+1$
 $6+1$



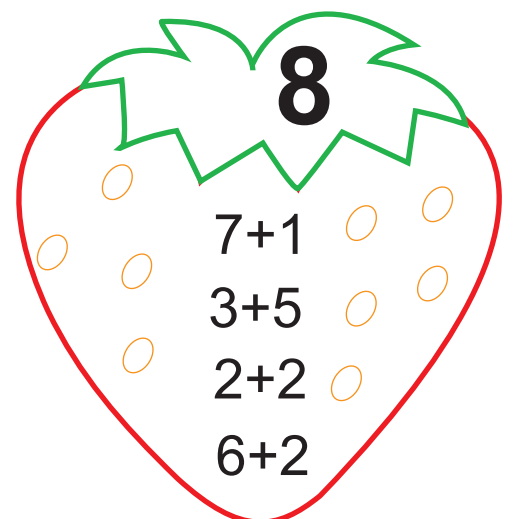
5

$4+2$
 $5+0$
 $3+2$
 $1+4$



6

$4+3$
 $1+5$
 $2+4$
 $4+2$







8


$7+1$
 $3+5$
 $2+2$
 $6+2$

SIMPLE ADDITION

Add the numbers inside the pineapple and circle the ones that add up to the number on the leaf.



Apple Tree Math



Instructions:

Complete each math problem and color the page!

Grade 1

Fruity Math Blast!

Add the numbers in the fruits.

1.

$$\begin{array}{r} 4 \\ + 1 \\ \hline \end{array}$$

2.

$$\begin{array}{r} 1 \\ + 7 \\ \hline \end{array}$$

3.

$$\begin{array}{r} 3 \\ + 2 \\ \hline \end{array}$$

4.

$$\begin{array}{r} 5 \\ + 4 \\ \hline \end{array}$$

5.

$$\begin{array}{r} 1 \\ + 1 \\ \hline \end{array}$$

6.

$$\begin{array}{r} 1 \\ + 4 \\ \hline \end{array}$$

7.

$$\begin{array}{r} 2 \\ + 7 \\ \hline \end{array}$$

8.

$$\begin{array}{r} 5 \\ + 1 \\ \hline \end{array}$$

9.

$$\begin{array}{r} 6 \\ + 2 \\ \hline \end{array}$$

10.


$$\begin{array}{r} 4 \\ + 3 \\ \hline \end{array}$$

11.

$$\begin{array}{r} 4 \\ + 2 \\ \hline \end{array}$$

12.

$$\begin{array}{r} 3 \\ + 4 \\ \hline \end{array}$$



SIMPLE ADDITION



Single Digit Addition

Add the numbers inside the orange and circle the ones that add up to the number on the top.

12

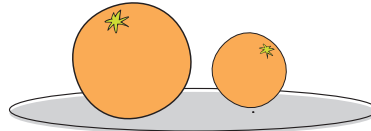


6+6

7+3

8+4

8+1



11



9+2

3+3

9+9

3+8

18



7+8

9+9

2+6

4+1

16



7+7

7+9

8+8

5+9

15



1+1

6+9

5+0

8+7

13



4+9

7+8

6+7

8+1

COLOR BY SUM

Add. Then color all the sums using the color key below.

1 = Green

2 = Red

3 = Blue

4 = Yellow

5 = Orange

FABULOUS FRUITS

$1 + 2$

$1 + 0$

$3 + 0$

$0 + 1$

$1 + 1$

$1 + 0$

$0 + 1$

$1 + 0$

$4 + 1$

$2 + 1$

$1 + 2$

$1 + 1$

$3 + 0$

$2 + 3$

$3 + 1$


Grade 1

Gummy Math!


Solving math problems tastes as good as gummies! Add the numbers. Use the bears to help you count.




1.

$$\begin{array}{r} 3 \\ + 6 \\ \hline \end{array}$$



2.

$$\begin{array}{r} 2 \\ + 2 \\ \hline \end{array}$$



3.

$$\begin{array}{r} 4 \\ + 3 \\ \hline \end{array}$$



4.

$$\begin{array}{r} 4 \\ + 5 \\ \hline \end{array}$$



5.

$$\begin{array}{r} 4 \\ + 1 \\ \hline \end{array}$$



6.

$$\begin{array}{r} 1 \\ + 6 \\ \hline \end{array}$$



7.

$$\begin{array}{r} 3 \\ + 1 \\ \hline \end{array}$$



8.

$$\begin{array}{r} 3 \\ + 3 \\ \hline \end{array}$$



9.

$$\begin{array}{r} 2 \\ + 6 \\ \hline \end{array}$$



10.

$$\begin{array}{r} 1 \\ + 5 \\ \hline \end{array}$$


11.

$$\begin{array}{r} 2 \\ + 3 \\ \hline \end{array}$$


12.

$$\begin{array}{r} 8 \\ + 1 \\ \hline \end{array}$$




Great job!

is an ThuVienTiengAnh.Com math superstar

