


Awesome

ADDITION

K

Kindergarten



How many of
each are in the
picture?

Table of Contents

Awesome Addition


Draw to Add
Addition: Circus Math
Picture Math Problems
Sports Math
Adding Spring Flowers
What Pretty Fish!
Adding Under the Sea!
Addition is Instrumental
Kitchen Addition
Autumn Addition
School Rules!
Winter Wonderland
Wear It! Addition
Add the Tools
Vroom, Vroom!
Add the Numbers: Meet Spiky
Add the Numbers: Roger
Add the Numbers: Ricky the Caterpillar
Add the Numbers: Jane the Hen

Certificate of Completion

DRAW TO ADD


*Follow the directions and add more objects.
Then, count them up to answer the questions!*

Draw 2 more ladybugs



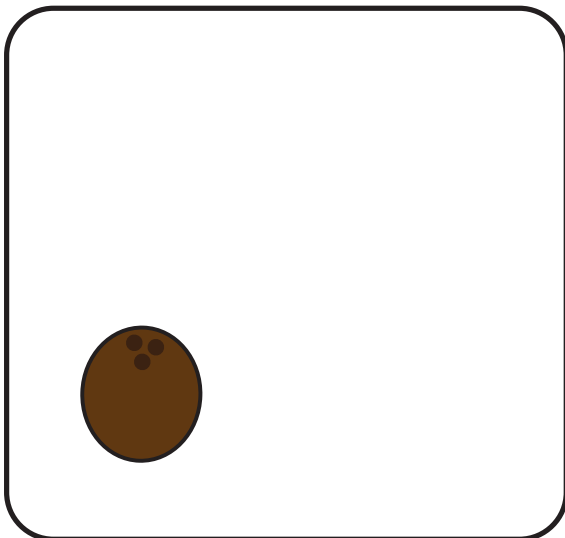
*Now there are
___ ladybugs!*

Draw 4 more leaves




*Now there are
___ leaves!*

Draw 5 more coconuts



*Now there are
___ coconuts!*

Draw 1 more apple



*Now there are
___ apples!*



Circus Math

How many of each picture do you see? Add them up and write the number in the box!

1




+

1




=

2




+

2




=

2



+

1



=



Bath Time Math

How many of each picture do you see? Add them up and write the number in the box!

4

1



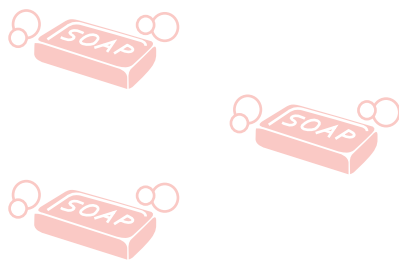
+



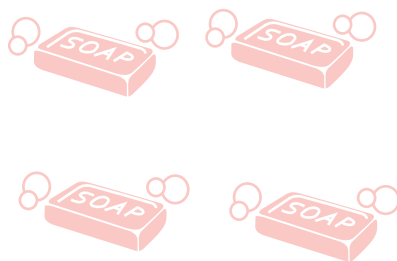
=

3

4




+




=

4

2



+



=




Sports Math


How many of each picture do you see? Add them up and write the number in the box!

5

3




+




=

5

5



+




=

6

3



+








=






Adding Spring FLOWERS!

How many do you see? Add them together!

5




				

+




				

=

3











				

+











				

=

10





				
				

+





				
				

=

4







				

+







				

=

6





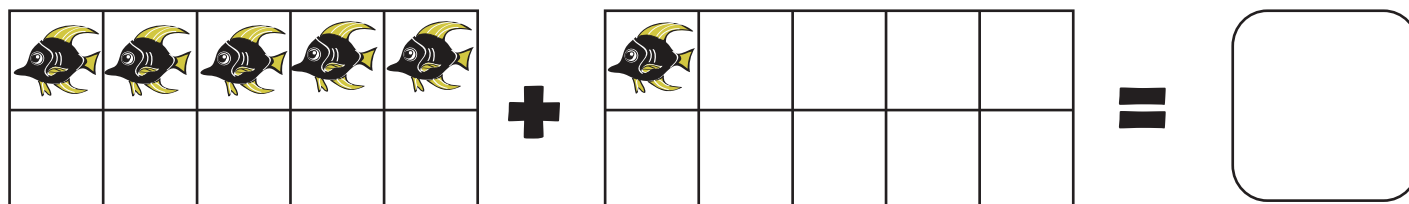
+

=


What pretty FISH!

How many pictures do you see? Add them up.

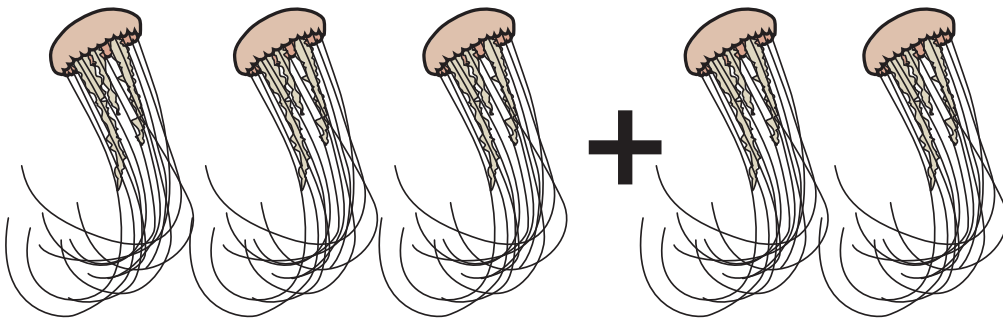


Adding Under the Sea!

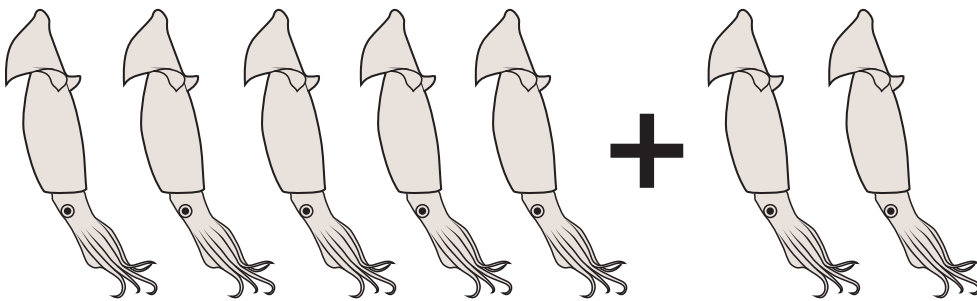
Add together the sea animals in each box, then write your answer in the box on the right.




$$\begin{array}{r} 2 \\ + 1 \\ \hline \end{array}$$



$$\begin{array}{r} 3 \\ + 2 \\ \hline \end{array}$$



$$\begin{array}{r} 5 \\ + 2 \\ \hline \end{array}$$




$$\begin{array}{r} 4 \\ + 1 \\ \hline \end{array}$$

Instruments

Addition 

Add together the instruments that are in each box and write your answer in the box on the right.

1




$$\begin{array}{r} 5 \\ +3 \\ \hline \end{array}$$

2




$$\begin{array}{r} 2 \\ +1 \\ \hline \end{array}$$

3



$$\begin{array}{r} 3 \\ +4 \\ \hline \end{array}$$

4



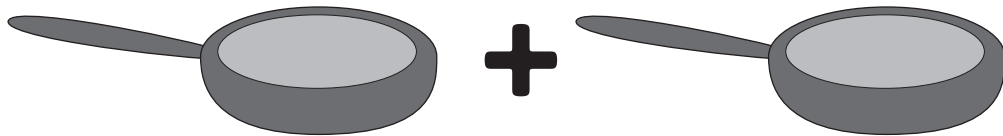
$$\begin{array}{r} 2 \\ +2 \\ \hline \end{array}$$

Kitchen

Addition 


Add together the kitchen items that are in each box and write your answer in the box on the right.

1



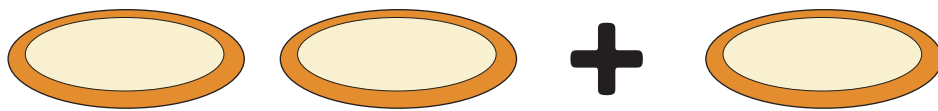
$$\begin{array}{r} 1 \\ +1 \\ \hline \end{array}$$

2




$$\begin{array}{r} 5 \\ +5 \\ \hline \end{array}$$

3



$$\begin{array}{r} 2 \\ +1 \\ \hline \end{array}$$

4



$$\begin{array}{r} 4 \\ +4 \\ \hline \end{array}$$

It's Fall!

Addition




Add together the fall items that are in each box and write your answer in the box on the right.

1



$$\begin{array}{r} 6 \\ +2 \\ \hline \end{array}$$

2



$$\begin{array}{r} 2 \\ +4 \\ \hline \end{array}$$

3



$$\begin{array}{r} 3 \\ +2 \\ \hline \end{array}$$

4




$$\begin{array}{r} 1 \\ +4 \\ \hline \end{array}$$

Back to School

Addition 


Add together the school supplies that are in each box and write your answer in the box on the right.

1



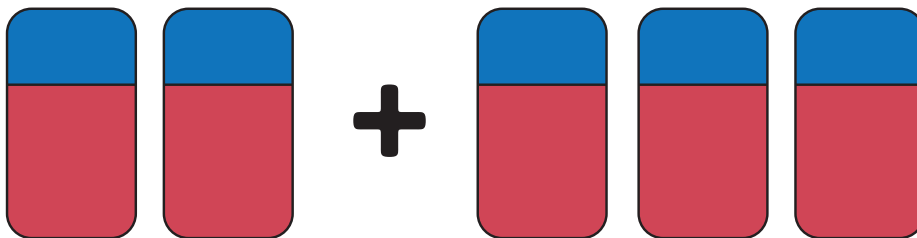
$$\begin{array}{r} 1 \\ +1 \\ \hline \end{array}$$

2



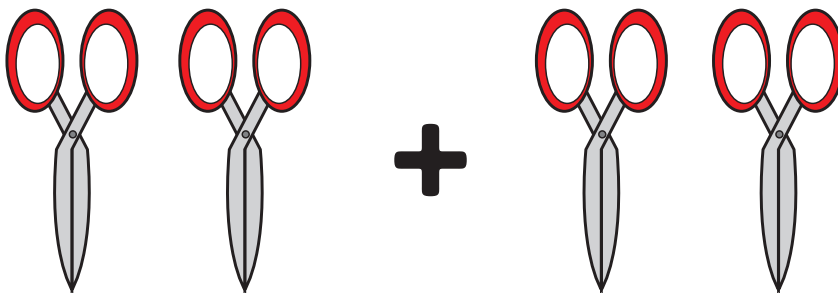
$$\begin{array}{r} 3 \\ +3 \\ \hline \end{array}$$

3



$$\begin{array}{r} 2 \\ +3 \\ \hline \end{array}$$

4



$$\begin{array}{r} 2 \\ +2 \\ \hline \end{array}$$

It's Winter!

Addition 


Add together the winter items that are in each box and write your answer in the box on the right.

1




$$\begin{array}{r} 3 \\ +3 \\ \hline \end{array}$$

2




$$\begin{array}{r} 2 \\ +4 \\ \hline \end{array}$$

3



$$\begin{array}{r} 1 \\ +2 \\ \hline \end{array}$$

4




$$\begin{array}{r} 4 \\ +1 \\ \hline \end{array}$$

Wear It!

Addition 

Add together the clothes that are in each box and write your answer in the box on the right.

1



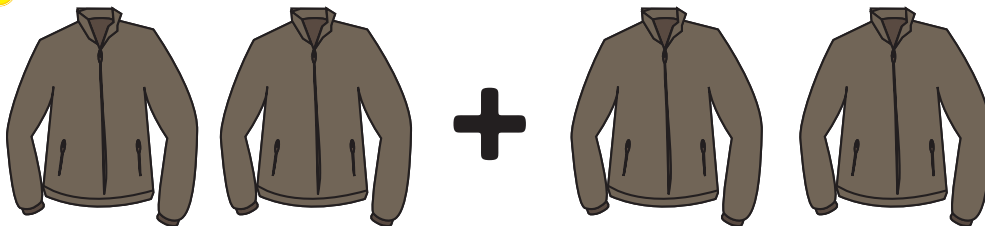
$$\begin{array}{r} 2 \\ +1 \\ \hline \end{array}$$

2




$$\begin{array}{r} 1 \\ +2 \\ \hline \end{array}$$

3



$$\begin{array}{r} 2 \\ +2 \\ \hline \end{array}$$

4




$$\begin{array}{r} 2 \\ +3 \\ \hline \end{array}$$

Tools

Addition +


Add together the tools that are in each box and write your answer in the box on the right.

1



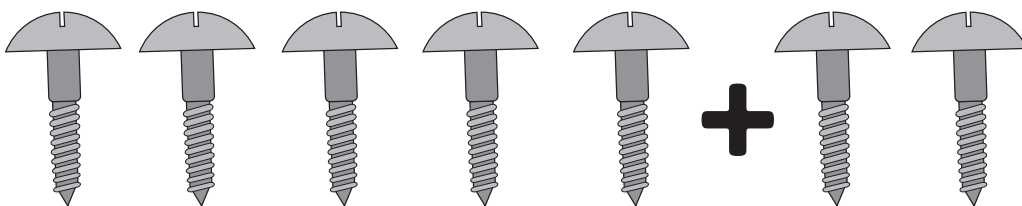
$$\begin{array}{r} 3 \\ +1 \\ \hline \end{array}$$

2




$$\begin{array}{r} 4 \\ +1 \\ \hline \end{array}$$

3



$$\begin{array}{r} 5 \\ +2 \\ \hline \end{array}$$

4




$$\begin{array}{r} 2 \\ +2 \\ \hline \end{array}$$

Let's Go!

Addition +

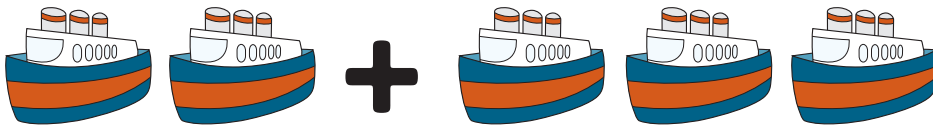
Add together the vehicles that are in each box and write your answer in the box on the right.

1




$$\begin{array}{r} 1 \\ +1 \\ \hline \end{array}$$

2




$$\begin{array}{r} 2 \\ +3 \\ \hline \end{array}$$

3




$$\begin{array}{r} 4 \\ +2 \\ \hline \end{array}$$

4



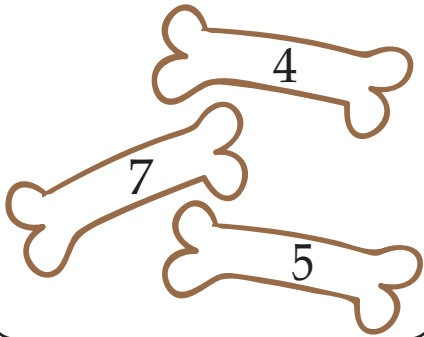
$$\begin{array}{r} 3 \\ +1 \\ \hline \end{array}$$



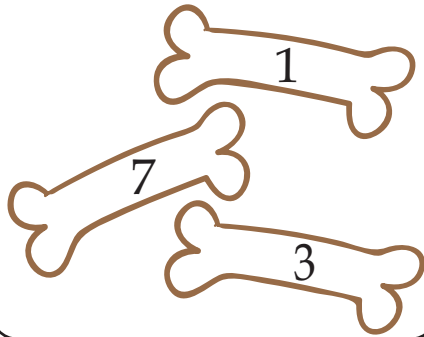
ADD THE NUMBERS

Spiky needs help finding the right bone. Add the numbers in each box and color the bone with the correct answer.

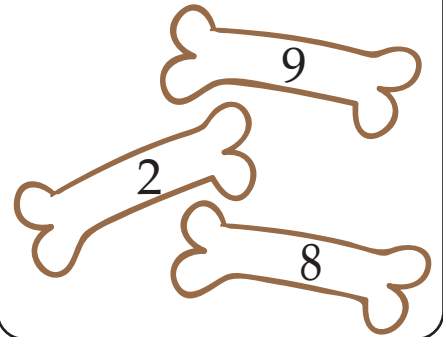
$2 + 5 = \text{-----}$



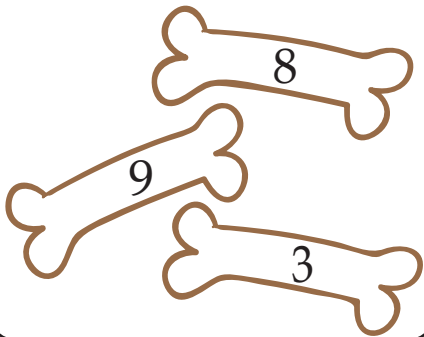
$1 + 2 = \text{-----}$




$3 + 6 = \text{-----}$



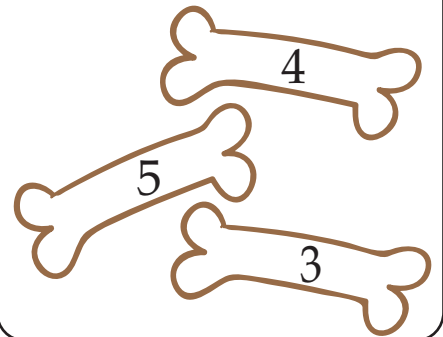
$5 + 3 = \text{-----}$




$7 + 1 = \text{-----}$



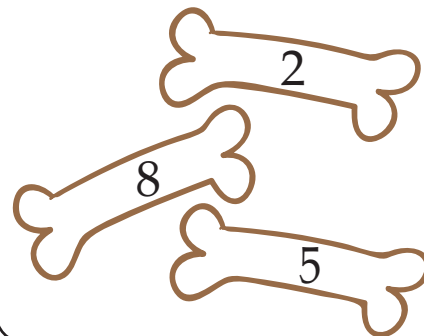
$1 + 4 = \text{-----}$




$2 + 5 = \text{-----}$



$4 + 4 = \text{-----}$



$3 + 3 = \text{-----}$

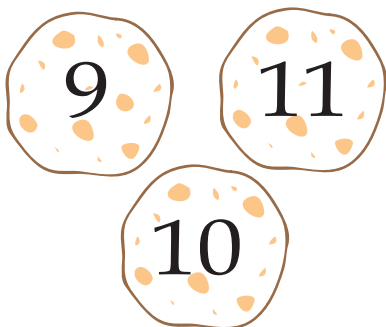





ADD THE NUMBERS

Roger needs help finding the right cookie. Add the numbers in each box and color the cookie with the correct answer.


$2 + 9 = \text{-----}$




$9 + 9 = \text{-----}$



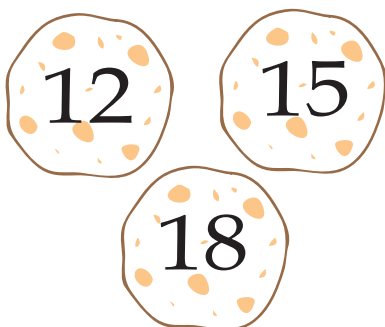
$5 + 8 = \text{-----}$



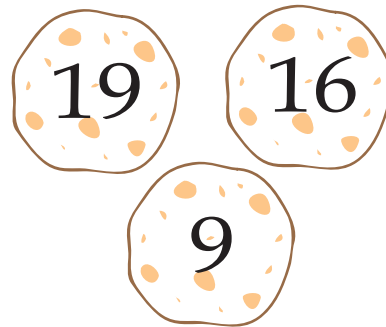
$7 + 7 = \text{-----}$




$8 + 4 = \text{-----}$



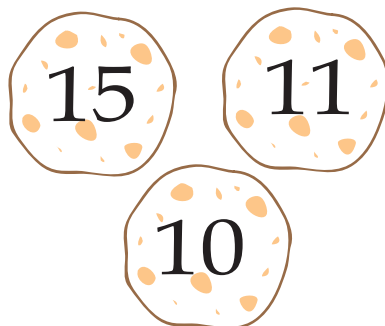
$7 + 9 = \text{-----}$



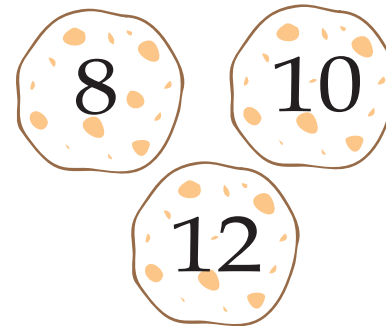
$8 + 9 = \text{-----}$




$9 + 6 = \text{-----}$



$7 + 5 = \text{-----}$




ADD THE NUMBERS




Ricky the Caterpillar needs help finding the right apple. Add the numbers in each box and color the apple with the correct answer.


$2 + 2 = \dots\dots\dots$




$5 + 5 = \dots\dots\dots$




$3 + 3 = \dots\dots\dots$




$7 + 7 = \dots\dots\dots$




$1 + 1 = \dots\dots\dots$




$9 + 9 = \dots\dots\dots$




$4 + 4 = \dots\dots\dots$




$8 + 8 = \dots\dots\dots$




$6 + 6 = \dots\dots\dots$





ADD THE NUMBERS

Jane needs help finding the right egg.
Add the numbers in each box and color
the egg with the correct answer.



$1 + 7 = \dots$

19 14

8

$4 + 7 = \dots$

11 12

4

$2 + 5 = \dots$

3 7

17

$6 + 3 = \dots$

9 7

10

$1 + 2 = \dots$

5 3

4

$5 + 8 = \dots$

13 14

9

$3 + 3 = \dots$

8 4

6

$8 + 7 = \dots$


10 15

19

$4 + 2 = \dots$

11 7

6



Great job!

is an ThuVienTiengAnh.Com math superstar

