

Addition Mission:


Facts Practice

1st
GRADE

2

+

3



5



Table of Contents

Addition Mission: Facts Practice

Math Counting
Apple Math
Hippity Hop
Crunchy Celery Addition
Superstar
Cherry Math
At the Library
Math Salad 1-10
Sunny Summer Math
Tetris Math Dash!
Making Numbers: Addition
Star Addition!
Fast Ten!
Baseball Addition
Fishing for Answers
Solving Three-Number Addition
Ken the Carpenter: Practice Addition
Math-Go-Round: Addition

Certificate of Completion

1st Grade Math


Counting



Count from 1 to 50 by filling in the missing numbers in the presents below!



Great job!



Grade 1

Apple Math


An apple a day keeps the doctor away! Add the numbers.
Use the apples to help you count.



1.

$$\begin{array}{r} 1 \\ + 4 \\ \hline \end{array}$$


2.

$$\begin{array}{r} 3 \\ + 2 \\ \hline \end{array}$$


3.

$$\begin{array}{r} 5 \\ + 4 \\ \hline \end{array}$$


4.

$$\begin{array}{r} 2 \\ + 4 \\ \hline \end{array}$$



5.

$$\begin{array}{r} 2 \\ + 7 \\ \hline \end{array}$$



6.

$$\begin{array}{r} 3 \\ + 3 \\ \hline \end{array}$$



7.

$$\begin{array}{r} 2 \\ + 2 \\ \hline \end{array}$$



8.

$$\begin{array}{r} 2 \\ + 5 \\ \hline \end{array}$$



9.

$$\begin{array}{r} 1 \\ + 5 \\ \hline \end{array}$$



10.

$$\begin{array}{r} 6 \\ + 1 \\ \hline \end{array}$$


11.


$$\begin{array}{r} 3 \\ + 1 \\ \hline \end{array}$$


12.

$$\begin{array}{r} 4 \\ + 3 \\ \hline \end{array}$$


Hippity Hop

Help Freddy the Frog fill in the missing numbers on the lily pads.



1		3		5		7		9	
11		13		15		17		19	
21		23		25		27		29	
31		33		35		37		39	
41		43		45		47		49	
51		53		55		57		59	
61		63		65		67		69	
71		73		75		77		79	
81		83		85		87		89	
91		93		95		97		99	

Grade 1

Crunchy Celery Addition

Chew on some of these crunchy math problems! Add the numbers.
Use the celery to help you count.



1.

$$\begin{array}{r} 3 \\ + 2 \\ \hline \end{array}$$

2.

$$\begin{array}{r} 2 \\ + 6 \\ \hline \end{array}$$

3.

$$\begin{array}{r} 2 \\ + 7 \\ \hline \end{array}$$

4.

$$\begin{array}{r} 1 \\ + 1 \\ \hline \end{array}$$

5.

$$\begin{array}{r} 6 \\ + 3 \\ \hline \end{array}$$

6.

$$\begin{array}{r} 3 \\ + 4 \\ \hline \end{array}$$

7.

$$\begin{array}{r} 1 \\ + 7 \\ \hline \end{array}$$

8.

$$\begin{array}{r} 1 \\ + 4 \\ \hline \end{array}$$

9.

$$\begin{array}{r} 7 \\ + 1 \\ \hline \end{array}$$

10.

$$\begin{array}{r} 1 \\ + 6 \\ \hline \end{array}$$

11.


$$\begin{array}{r} 2 \\ + 1 \\ \hline \end{array}$$


12.


$$\begin{array}{r} 6 \\ + 2 \\ \hline \end{array}$$


Superstar

Count the stars in each group. Write the number in the box. Write the sum in the last box.


$$\begin{array}{c} \star \\ \square \end{array} + \begin{array}{c} \star \star \star \\ \star \star \\ \square \end{array} = \begin{array}{c} \star \star \star \\ \star \star \star \\ \square \end{array}$$


$$\begin{array}{c} \star \star \\ \star \star \\ \square \end{array} + \begin{array}{c} \star \star \\ \star \\ \square \end{array} = \begin{array}{c} \star \star \star \\ \star \star \star \\ \star \star \\ \square \end{array}$$


$$\begin{array}{c} \star \star \star \\ \star \star \star \\ \square \end{array} + \begin{array}{c} \star \star \\ \square \end{array} = \begin{array}{c} \star \star \star \\ \star \star \star \\ \star \star \\ \square \end{array}$$


$$\begin{array}{c} \star \star \star \\ \star \star \\ \square \end{array} + \begin{array}{c} \star \star \\ \star \star \\ \square \end{array} = \begin{array}{c} \star \star \star \\ \star \star \star \\ \star \star \star \\ \square \end{array}$$

Grade 1

Cherry Math

Adding is as fun as cherry picking! Add the numbers.
Use the cherries to help you count.



1.

$$\begin{array}{r} 4 \\ + 5 \\ \hline \end{array}$$

2.

$$\begin{array}{r} 3 \\ + 1 \\ \hline \end{array}$$

3.

$$\begin{array}{r} 5 \\ + 1 \\ \hline \end{array}$$

4.

$$\begin{array}{r} 5 \\ + 4 \\ \hline \end{array}$$

5.

$$\begin{array}{r} 6 \\ + 1 \\ \hline \end{array}$$

6.

$$\begin{array}{r} 4 \\ + 1 \\ \hline \end{array}$$

7.

$$\begin{array}{r} 3 \\ + 2 \\ \hline \end{array}$$

8.

$$\begin{array}{r} 6 \\ + 2 \\ \hline \end{array}$$

9.

$$\begin{array}{r} 5 \\ + 3 \\ \hline \end{array}$$

10.

$$\begin{array}{r} 1 \\ + 8 \\ \hline \end{array}$$

11.

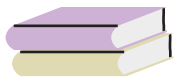


$$\begin{array}{r} 1 \\ + 5 \\ \hline \end{array}$$


12.


$$\begin{array}{r} 1 \\ + 1 \\ \hline \end{array}$$



At the Library



Count the books in each stack. Write the number in the box. Add the numbers to find out how many books there are in all.



 \square  \square  \square  $+$ \square

 $+$ \square

 $+$ \square

 \square \square \square  \square
 $+$ \square

 \square  \square
 $+$ \square

 \square  \square
 $+$ \square

 \square

Math Salad 1-10, 16

★ Add the numbers together for each problem.
Write your answer in the blank space.

$5 + 4 = \underline{\quad}$

$3 + 2 = \underline{\quad}$

$1 + 8 = \underline{\quad}$


$5 + 2 = \underline{\quad}$

$5 + 3 = \underline{\quad}$

$2 + 4 = \underline{\quad}$

$4 + 5 = \underline{\quad}$

$4 + 2 = \underline{\quad}$



How many pears are
in the fruit salad?

Grade 1

Sunny Summer Math

Clear skies ahead...let's go to the beach! Add the numbers.

1.
$$\begin{array}{r} 2 \\ + 3 \\ \hline \end{array}$$

2.
$$\begin{array}{r} 2 \\ + 6 \\ \hline \end{array}$$

3.
$$\begin{array}{r} 4 \\ + 1 \\ \hline \end{array}$$

4.
$$\begin{array}{r} 2 \\ + 1 \\ \hline \end{array}$$

5.
$$\begin{array}{r} 1 \\ + 5 \\ \hline \end{array}$$

6.
$$\begin{array}{r} 6 \\ + 2 \\ \hline \end{array}$$

7.
$$\begin{array}{r} 2 \\ + 2 \\ \hline \end{array}$$

8.
$$\begin{array}{r} 4 \\ + 1 \\ \hline \end{array}$$

9.
$$\begin{array}{r} 5 \\ + 4 \\ \hline \end{array}$$

10.
$$\begin{array}{r} 5 \\ + 2 \\ \hline \end{array}$$

11.
$$\begin{array}{r} 2 \\ + 5 \\ \hline \end{array}$$

12.
$$\begin{array}{r} 5 \\ + 3 \\ \hline \end{array}$$



Grade 1

TETRIS MATH DASH!

Hurry! Add the numbers before the tetris blocks fall.

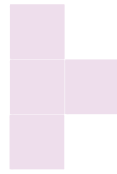
1.

$$\begin{array}{r} 1 \\ + 8 \\ \hline \end{array}$$




2.

$$\begin{array}{r} 4 \\ + 1 \\ \hline \end{array}$$



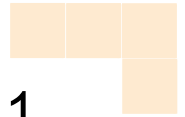
3.

$$\begin{array}{r} 6 \\ + 3 \\ \hline \end{array}$$




4.

$$\begin{array}{r} 1 \\ + 5 \\ \hline \end{array}$$




5.

$$\begin{array}{r} 5 \\ + 3 \\ \hline \end{array}$$




6.

$$\begin{array}{r} 2 \\ + 5 \\ \hline \end{array}$$



7.

$$\begin{array}{r} 2 \\ + 4 \\ \hline \end{array}$$




8.

$$\begin{array}{r} 2 \\ + 7 \\ \hline \end{array}$$



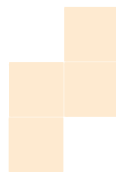
9.

$$\begin{array}{r} 5 \\ + 4 \\ \hline \end{array}$$




10.

$$\begin{array}{r} 1 \\ + 7 \\ \hline \end{array}$$



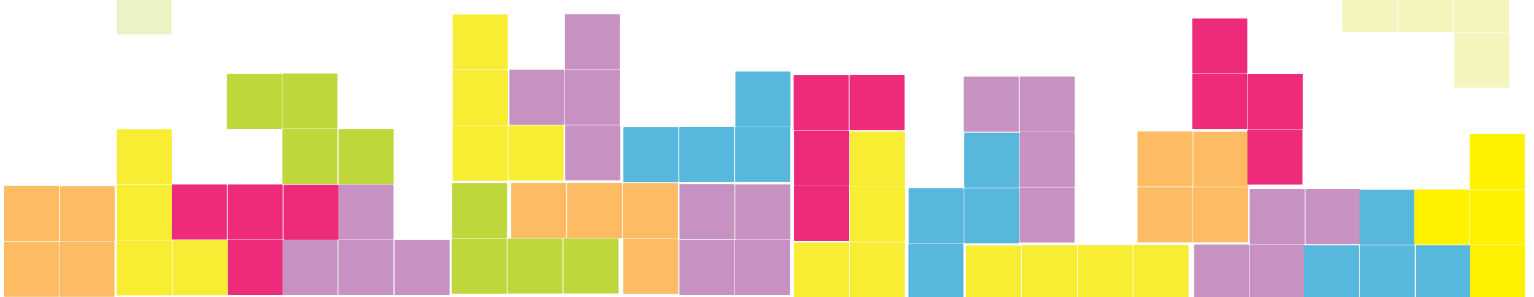

11.

$$\begin{array}{r} 3 \\ + 5 \\ \hline \end{array}$$



12.

$$\begin{array}{r} 3 \\ + 2 \\ \hline \end{array}$$



Making Numbers: Addition

You can get to a number by adding many different ways. Here are all the ways to make 5. Write down what makes the numbers below.

5

$$2 + 3 = 5$$

$$4 + 1 = 5$$

$$5 + 0 = 5$$


$$3 + 2 = 5$$

$$1 + 4 = 5$$

$$0 + 5 = 5$$




3



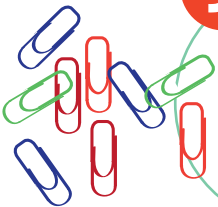
6

4



8

9



Grade 1

Star Addition!

Add the numbers in the stars below.

1.

$$\begin{array}{r} 2 \\ + 5 \\ \hline \end{array}$$

2.

$$\begin{array}{r} 2 \\ + 2 \\ \hline \end{array}$$

3.

$$\begin{array}{r} 2 \\ + 1 \\ \hline \end{array}$$

4.

$$\begin{array}{r} 2 \\ + 6 \\ \hline \end{array}$$

5.

$$\begin{array}{r} 3 \\ + 5 \\ \hline \end{array}$$

6.

$$\begin{array}{r} 6 \\ + 1 \\ \hline \end{array}$$

7.

$$\begin{array}{r} 6 \\ + 2 \\ \hline \end{array}$$

8.

$$\begin{array}{r} 2 \\ + 4 \\ \hline \end{array}$$

9.

$$\begin{array}{r} 2 \\ + 3 \\ \hline \end{array}$$

10.

$$\begin{array}{r} 3 \\ + 2 \\ \hline \end{array}$$

11.

$$\begin{array}{r} 1 \\ + 8 \\ \hline \end{array}$$

12.

$$\begin{array}{r} 6 \\ + 3 \\ \hline \end{array}$$

Fast Ten! 10 10 10

Add these numbers together. First, find the numbers that make ten, then add the rest. See the example below.

$$8 + 4 + 6 = 8 + \underbrace{4 + 6}_{10} = 8 + 10 = 18$$

$$7 + 4 + 3 =$$

$$5 + 9 + 5 =$$

$$3 + 8 + 2 =$$

$$9 + 9 + 1 =$$

$$5 + 9 + 2 + 5 =$$

$$6 + 8 + 1 + 4 =$$

$$4 + 8 + 6 + 2 =$$

$$7 + 1 + 3 + 9 =$$

$$8 + 9 + 2 + 1 + 5 =$$


$$6 + 5 + 7 + 4 + 3 =$$

BASEBALL

ADDITION #3



Batter up! Step up to the plate and swing for the fences. Solve the following addition problems and you'll be an All-Star!



$$6 + 6 = \underline{\quad}$$

$$7 + 3 = \underline{\quad}$$

$$8 + 1 = \underline{\quad}$$

$$4 + 6 = \underline{\quad}$$

$$6 + 7 = \underline{\quad}$$

$$5 + 4 = \underline{\quad}$$

$$3 + 8 = \underline{\quad}$$

$$7 + 5 = \underline{\quad}$$

$$5 + 6 = \underline{\quad}$$


$$4 + 4 = \underline{\quad}$$

$$7 + 2 = \underline{\quad}$$


$$2 + 8 = \underline{\quad}$$

Fishing



for Answers #3



Circle the fish below that show ways of making 12.



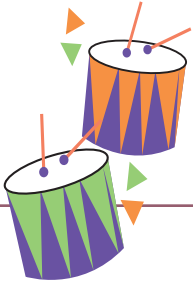
12



Solving Three-Number Addition #2


Read the questions below and answer the questions. See the example. Show your work.

At the parade, there are two drummers in the front row, five drummers in the second row, and three in the last row. How many drummers are there?




$$2 + 5 + 3 = 10$$

The farmer picked four eggs from the first chicken, eight eggs from the second, and twelve eggs from the third. How many eggs did he pick today?



Abacus the horse ran two miles in the morning, four miles in the afternoon, and seven miles in the evening. How many miles did Abacus run today?



This week Roy read three books, Rick read five books, and Rose read six books. How many books did they read altogether?



Ashley sold five lillies, ten roses, and ten daisies. How many flowers did she sell?



2nd
Grade

Ken the Carpenter

Practice Addition

Add the numbers. Then answer the question below.



$$\begin{array}{r} 94 \\ + 51 \\ \hline \end{array}$$

$$\begin{array}{r} 74 \\ + 69 \\ \hline \end{array}$$

$$\begin{array}{r} 21 \\ + 71 \\ \hline \end{array}$$

$$\begin{array}{r} 53 \\ + 90 \\ \hline \end{array}$$

$$\begin{array}{r} 18 \\ + 55 \\ \hline \end{array}$$

$$\begin{array}{r} 88 \\ + 83 \\ \hline \end{array}$$

$$\begin{array}{r} 15 \\ + 60 \\ \hline \end{array}$$

$$\begin{array}{r} 81 \\ + 70 \\ \hline \end{array}$$

$$\begin{array}{r} 12 \\ + 94 \\ \hline \end{array}$$

$$\begin{array}{r} 19 \\ + 61 \\ \hline \end{array}$$

$$\begin{array}{r} 87 \\ + 81 \\ \hline \end{array}$$

$$\begin{array}{r} 38 \\ + 55 \\ \hline \end{array}$$



Ken needs to cut 78 pieces of wood for the living room and 84 pieces for the master bedroom. How many pieces of wood in total does Ken need to cut?

Math-Go-Round

Addition | Difficulty: ★☆☆☆

Find a friend and practice your addition skills. Find two coins or game pieces and place them on the square labeled **START**. Choose one of the problems to solve and move your game piece clockwise around the board to that problem's answer.

Keep track of the number of corners you go around on each move. For each one, give yourself a point. The player with the most points at the end is the winner.


Keep score with the table below.

Player 1
Player 2

Round 1		
Round 2		
Round 3		
Round 4		
Round 5		
Round 6		
Round 7		
Round 8		

Total _____

START +1 Point	48	56	76	89	+1 Point
29	$\begin{array}{r} 24 \\ + 13 \\ \hline \end{array}$	$\begin{array}{r} 26 \\ + 12 \\ \hline \end{array}$	$\begin{array}{r} 61 \\ + 20 \\ \hline \end{array}$	$\begin{array}{r} 35 \\ + 21 \\ \hline \end{array}$	28
97	$\begin{array}{r} 53 \\ + 41 \\ \hline \end{array}$	$\begin{array}{r} 26 \\ + 22 \\ \hline \end{array}$	$\begin{array}{r} 29 \\ + 10 \\ \hline \end{array}$	$\begin{array}{r} 43 \\ + 36 \\ \hline \end{array}$	37
81	$\begin{array}{r} 14 \\ + 14 \\ \hline \end{array}$	$\begin{array}{r} 32 \\ + 17 \\ \hline \end{array}$	$\begin{array}{r} 15 \\ + 11 \\ \hline \end{array}$	$\begin{array}{r} 47 \\ + 42 \\ \hline \end{array}$	38
49	$\begin{array}{r} 83 \\ + 15 \\ \hline \end{array}$	$\begin{array}{r} 73 \\ + 24 \\ \hline \end{array}$	$\begin{array}{r} 50 \\ + 26 \\ \hline \end{array}$	$\begin{array}{r} 18 \\ + 11 \\ \hline \end{array}$	39
+1 Point	79	98	26	94	+1 Point



Great job!

is an ThuVienTiengAnh.Com math superstar

